




# How many ways can Steve make 10?

Add the brown blocks to the grass blocks and see how many ways you can make 10.




$$\textcircled{3} + \textcircled{7} = 10$$

---




$$\textcircled{\phantom{0}} + \textcircled{\phantom{0}} = 10$$

---



$$\textcircled{\phantom{0}} + \textcircled{\phantom{0}} = 10$$

---



$$\textcircled{\phantom{0}} + \textcircled{\phantom{0}} = 10$$


---

# TENS FRAMES


How many more are needed to make 10 in each frame? Draw more heads in each frame then write the number in the circle below.



$$\textcircled{8} + \textcircled{\quad} = 10$$


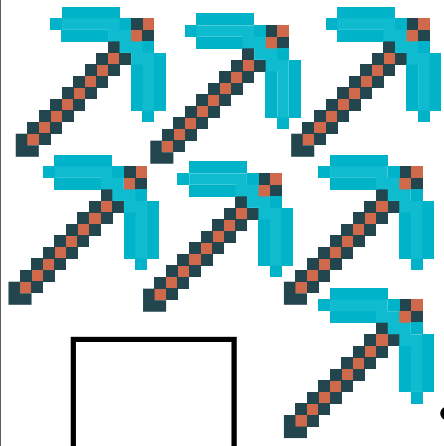


$$\textcircled{5} + \textcircled{\quad} = 10$$




$$\textcircled{4} + \textcircled{\quad} = 10$$



Draw enough objects to make 10




+




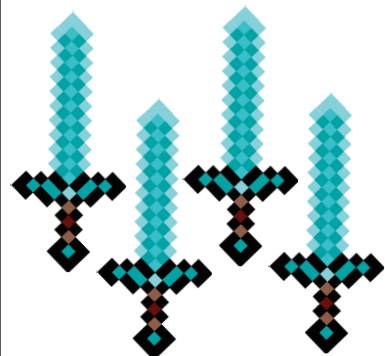
= 10




+



= 10




+




= 10



Draw enough objects to make 10




= 10





+




= 10




+




= 10




+





## Addition with sums of 10

Cut out the numbers and  
paste to the correct boxes.



$$\boxed{7} + \boxed{\phantom{00}} = 10$$

$$\boxed{1} + \boxed{\phantom{00}} = 10$$

$$\boxed{\phantom{00}} + \boxed{4} = 10$$

$$\boxed{3} + \boxed{\phantom{00}} = 10$$

$$\boxed{5} + \boxed{\phantom{00}} = 10$$

$$\boxed{\phantom{00}} + \boxed{6} = 10$$

$$\boxed{\phantom{00}} + \boxed{2} = 10$$

$$\boxed{8} + \boxed{\phantom{00}} = 10$$

$$\boxed{10} + \boxed{\phantom{00}} = 10$$

$$\boxed{0} + \boxed{\phantom{00}} = 10$$



0

1

2

3

4

5

6

7

8

9

10